

Year 7 Class 26 questions

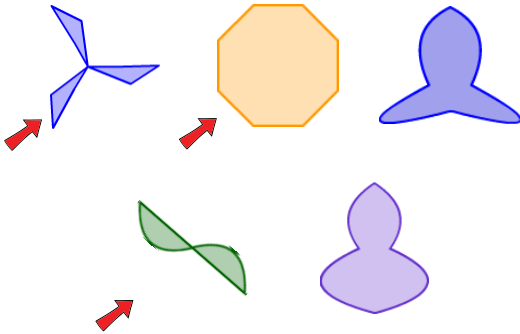
Q1



How many lines of symmetry?

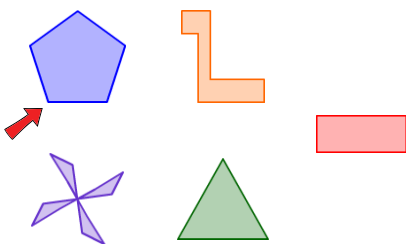
Q2

Select the shapes which have **rotational symmetry**.



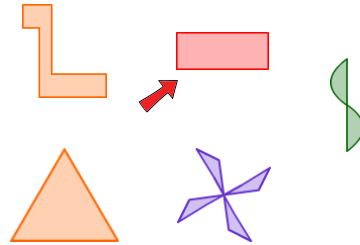
Q3

Select the shapes which have **5 axes of symmetry**.



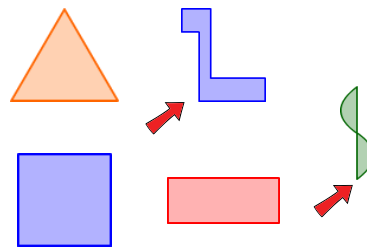
Q4

Select the shapes which have **2 axes of symmetry**.



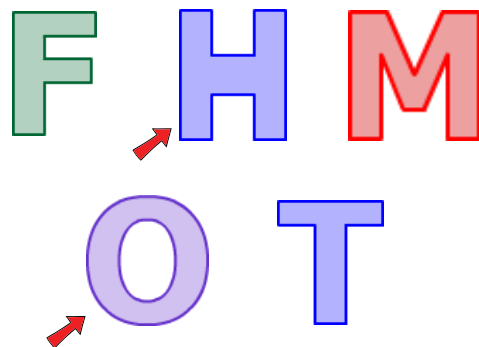
Q5

Select the shapes which have **0 axes of symmetry**.



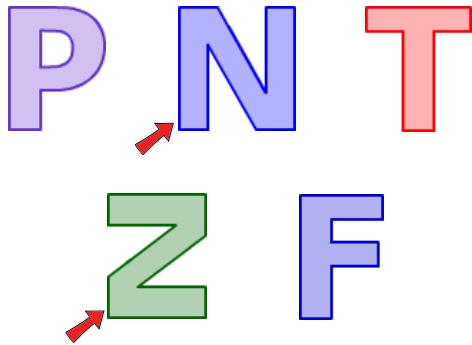
Q6

Select the letters which have **point symmetry**.



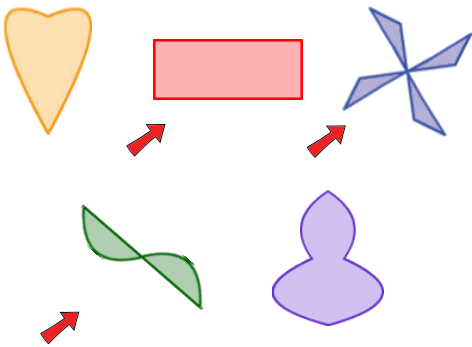
Q7

Select the letters which have **point symmetry**.



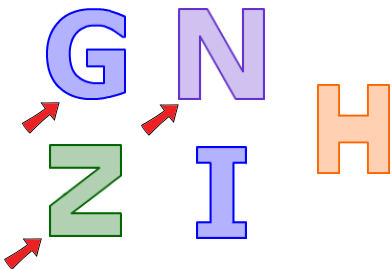
Q8

Select the shapes which have **point symmetry**.



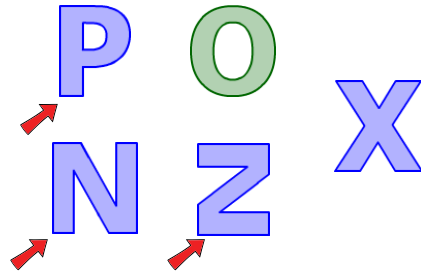
Q9

Select the letters which have **0 axes of symmetry**.



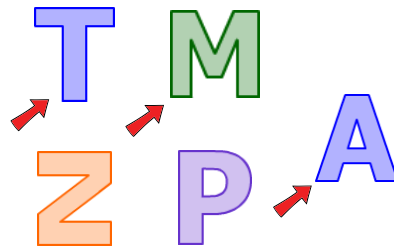
Q10

Select the letters which have **0 axes of symmetry**.



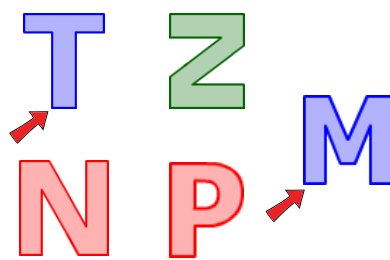
Q11

Select the letters which have **1 axis of symmetry**.



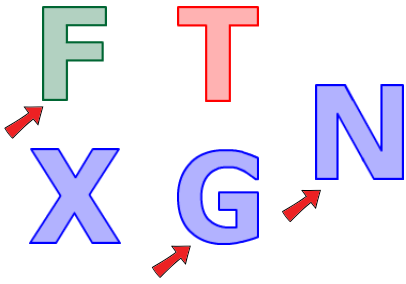
Q12

Select the letters which have **1 axis of symmetry**.



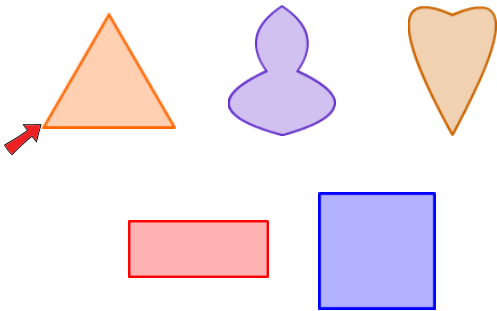
Q13

Select the letters which have **0** axes of symmetry.



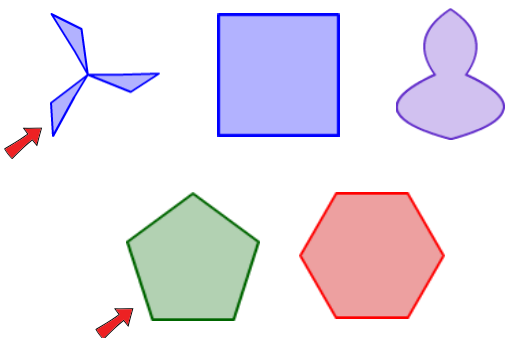
Q14

Select the shapes which have **rotational but NOT point symmetry**.



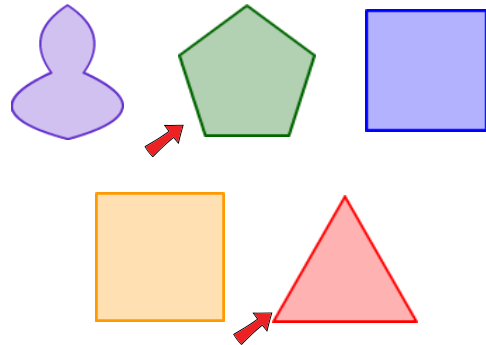
Q15

Select the shapes which have **rotational but NOT point symmetry**.



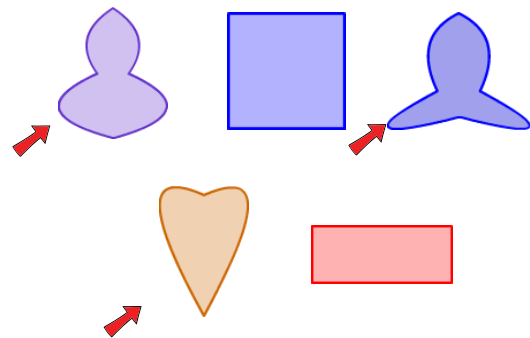
Q16

Select the shapes which have **rotational but NOT point symmetry**.



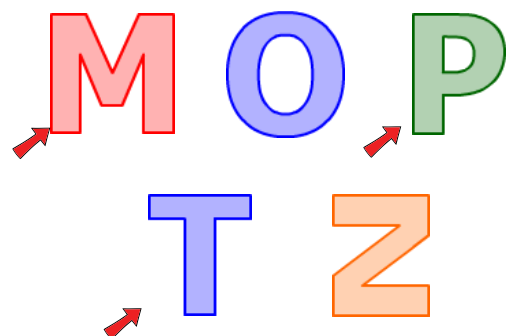
Q17

Select the shapes which do **NOT** have **rotational symmetry**.



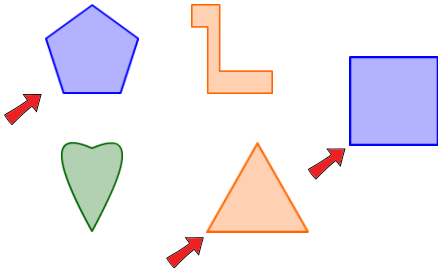
Q18

Select the letters which do **NOT** have **rotational symmetry**.



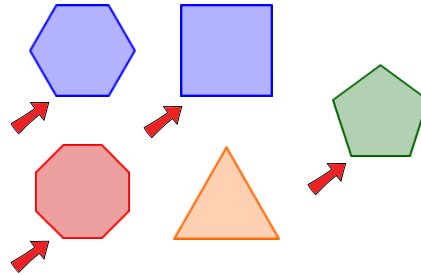
Q19

Select the shapes which have **more than 1** axis of symmetry.



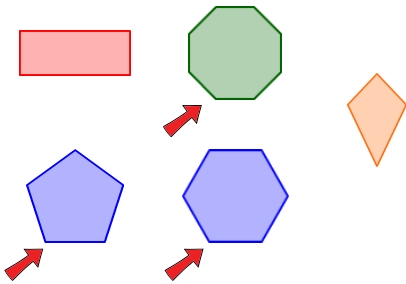
Q22

Select the shapes which have **more than 3** axes of symmetry.



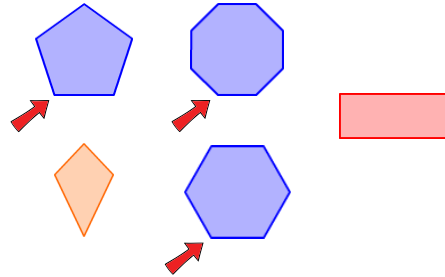
Q20

Select the shapes which have **more than 2** axes of symmetry.



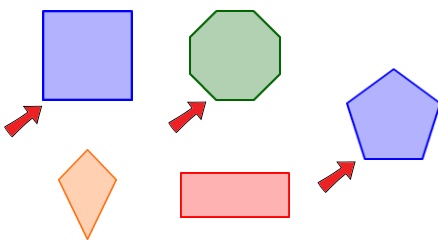
Q23

Select the shapes which have **more than 4** axes of symmetry.



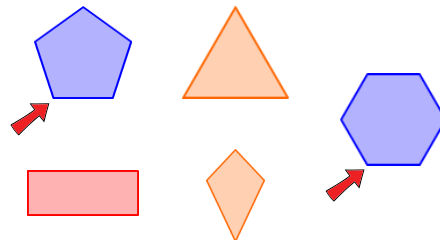
Q21

Select the shapes which have **more than 2** axes of symmetry.



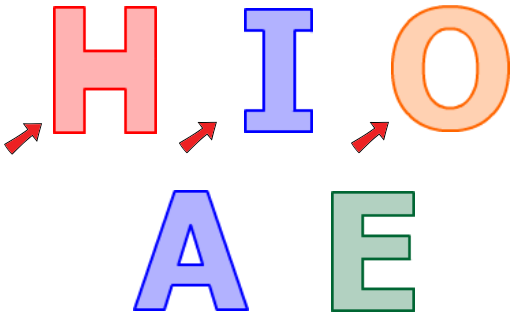
Q24

Select the shapes which have **more than 4** axes of symmetry.



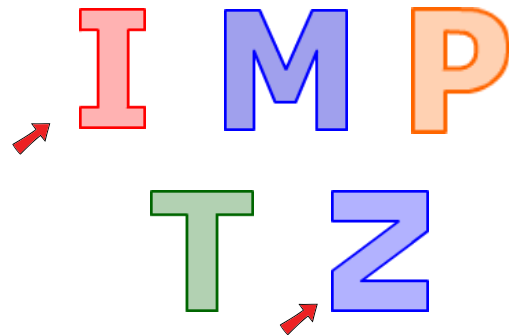
Q25

Select the letters which have rotational symmetry.



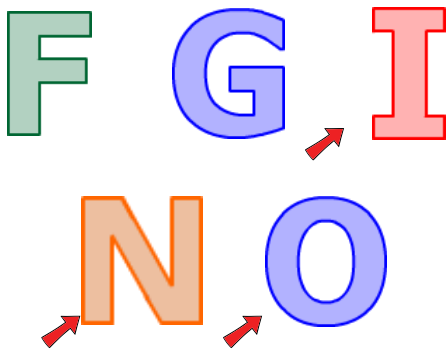
Q28

Select the letters which have rotational symmetry.



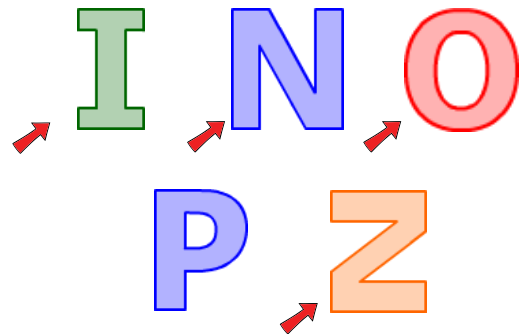
Q26

Select the letters which have rotational symmetry.



Q29

Select the letters which have rotational symmetry.



Q27

Select the letters which have rotational symmetry.



Q30

Select the letters which have rotational symmetry.

