

# Year 7 Class 26 questions

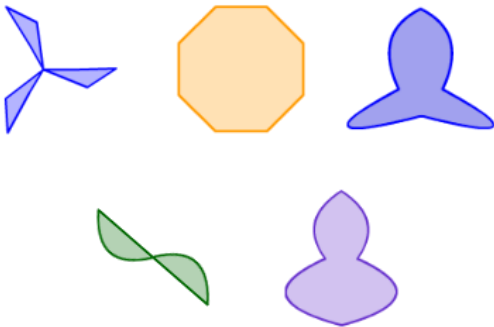
Q1



How many lines of symmetry?

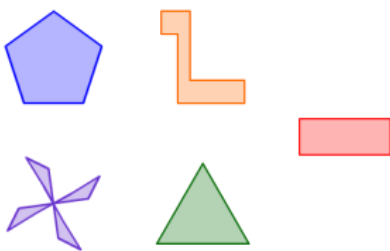
Q2

Select the shapes which have **rotational symmetry**.



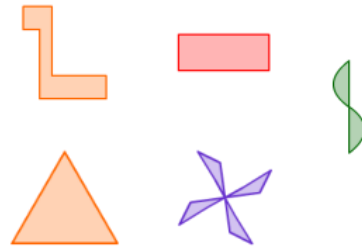
Q3

Select the shapes which have **5 axes of symmetry**.



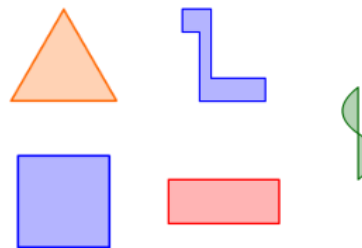
Q4

Select the shapes which have **2 axes of symmetry**.



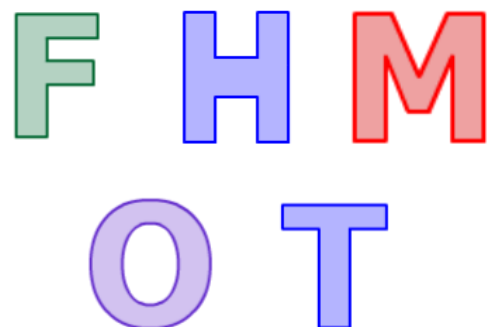
Q5

Select the shapes which have **0 axes of symmetry**.



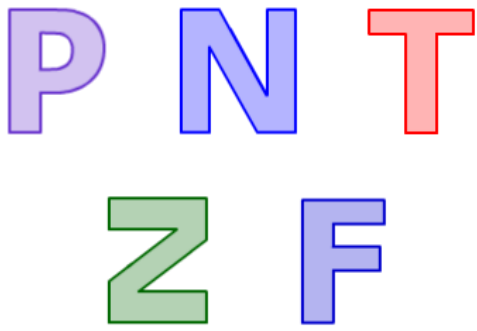
Q6

Select the letters which have **point symmetry**.




Q7

Select the letters which have **point symmetry**.




Q8

Select the shapes which have **point symmetry**.



Q9

Select the letters which have **0 axes of symmetry**.



Q10

Select the letters which have **0 axes of symmetry**.



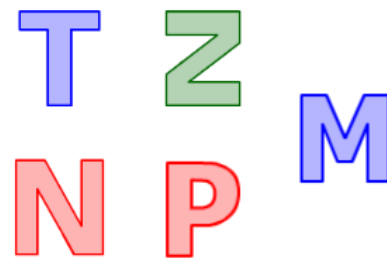
Q11

Select the letters which have **1 axis of symmetry**.



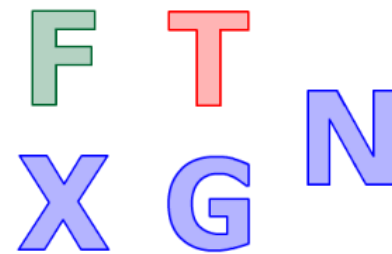
Q12

Select the letters which have **1 axis of symmetry**.



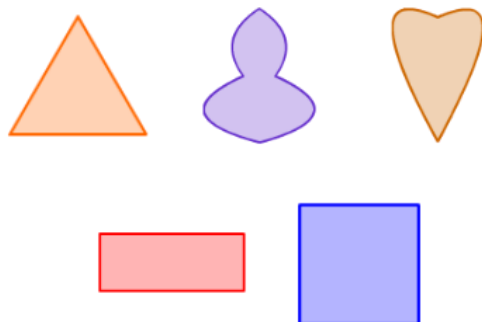
Q13

Select the letters which have **0 axes of symmetry**.



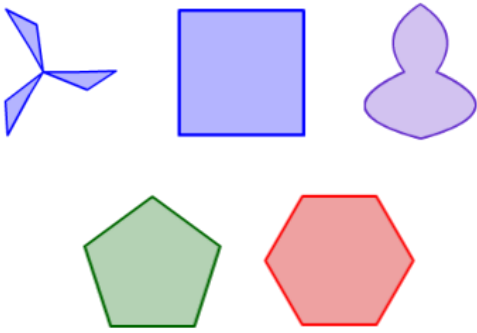
Q14

Select the shapes which have **rotational but NOT point symmetry**.



Q15

Select the shapes which have **rotational but NOT point symmetry**.



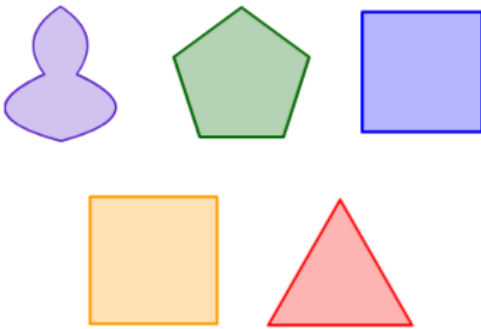
Q18

Select the letters which do **NOT** have **rotational symmetry**.



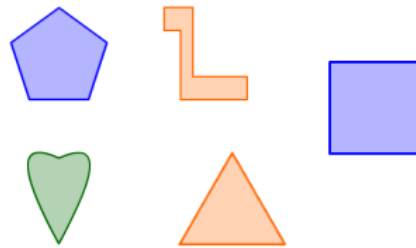
Q16

Select the shapes which have **rotational but NOT point symmetry**.



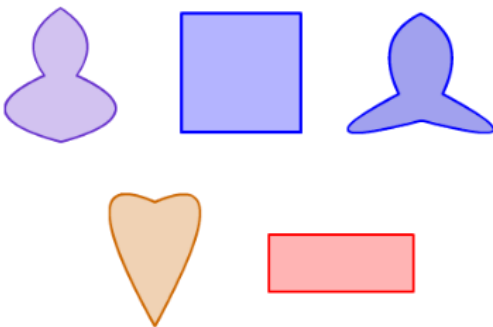
Q19

Select the shapes which have **more than 1** axis of symmetry.



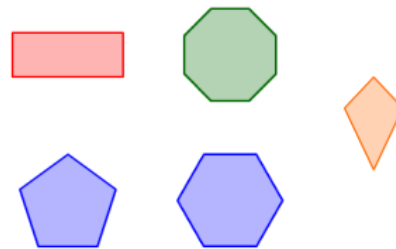
Q17

Select the shapes which do **NOT** have **rotational symmetry**.



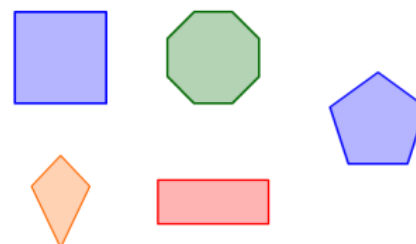
Q20

Select the shapes which have **more than 2** axes of symmetry.



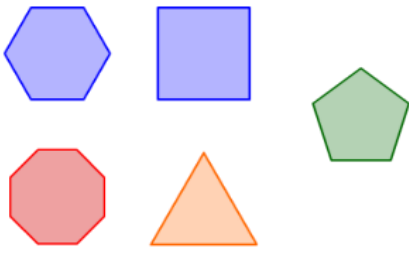
Q21

Select the shapes which have **more than 2** axes of symmetry.



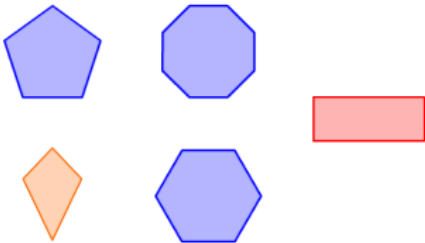
Q22

Select the shapes which have **more than 3** axes of symmetry.



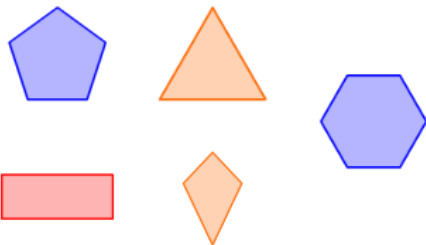
Q23

Select the shapes which have **more than 4** axes of symmetry.



Q24

Select the shapes which have **more than 4** axes of symmetry.



Q25

Select the letters which have **rotational symmetry**.



Q26

Select the letters which have **rotational symmetry**.



Q27

Select the letters which have **rotational symmetry**.



Q28

Select the letters which have **rotational symmetry**.



Q29

Select the letters which have **rotational symmetry**.

I N O

P Z

Q30

Select the letters which have **rotational symmetry**.

H I G

N Z